

Cătălin Dumitru Dorcioman  
Eva Edith Dorcioman

Amelia Cosmina Uifălean  
Ana-Maria Barboș  
Mișara Mocanu

SM-ART

# ANTRENEAZĂ CREIERUL

6+

Brașov, 2023



[www.numlit.eu](http://www.numlit.eu)

**CAIET INTEGRAT  
PENTRU CLASA PREGĂTITOARE**



*Antrenează creierul*



Cătălin Dumitru Dorcioman  
Eva-Edith Dorcioman

Amelia Cosmina Uifălean  
Ana-Maria Barboș  
Mioara Mocanu

# ANTRENEAZĂ CREIERUL

**CAIET DE LUCRU**  
PENTRU CLASA PREGĂTITOARE

Brașov, 2023

Editura  
  
*Antrenează creierul*

**Descrierea CIP a Bibliotecii Naționale a României**

**Antrenează creierul : caiet de lucru pentru clasa pregătitoare / Cătălin**

Dumitru Dorcioman, Eva-Edith Dorcioman, Amelia Cosmina Uifălean,.... –  
Brașov : Numlit, 2023

ISBN 978-606-95466-7-3

I. Dorcioman, Cătălin Dumitru

II. Dorcioman, Eva-Edith

III. Uifălean, Amelia Cosmina

37

Reproducerea parțială sau integrală  
a materialelor NumLit este strict interzisă.

Produs în România

Editura  
  
*Antrenează creierul*

 + 0721 10 10 20

 office@printings.ro

 www.numlit.eu

# Vocale



# Consoane



0

Aa

Ăă

Ââ

Bb

Cc

Dd

Ee

Ff

Gg

Hh

Ii

Îî

Ji

Kk

Ll

Mm

Nn

Oo

Pp

Qq

Rr

Ss

Șș

Tt

Țț

Uu

Vv

Ww

Xx

Yy

Zz

Corelarea activă, în procesul pedagogic, dintre literă și poziția ei în alfabet  
te ajută pe copii să descopere, prin joc, noțiuni de matematică și comunicare.  
Reproducerea parțială sau totală a materialelor NumLit este strict interzisă.

Produs în România ®

NumLit





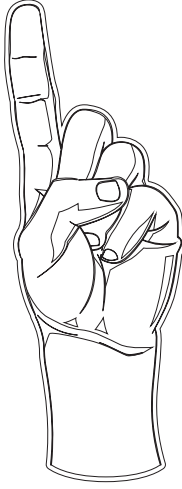
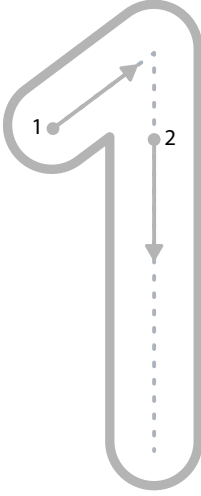
ZIUA

LUNA

ANUL

Lu Ma Mi J Vi

1



a



a



A

A

A

A

A

A

A

A

A

A

A

A

A

A

A

A

A

A

A

A

A

A

A

A

A

A

A

A

A

A

A

A

A

A

A

A

A

A

A

A

A

1

1

1

1

1

1

1

1

1




1

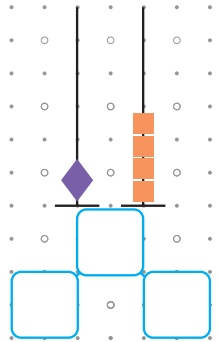
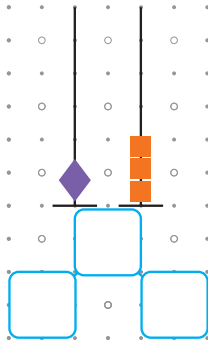
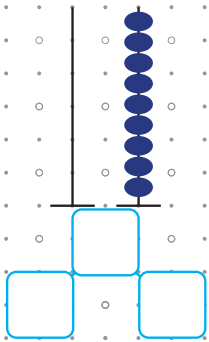
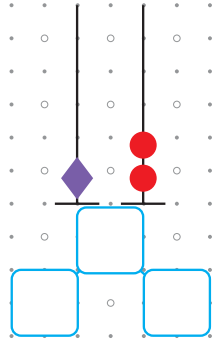
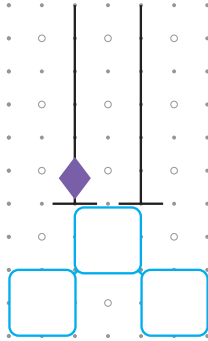
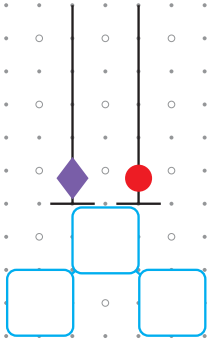
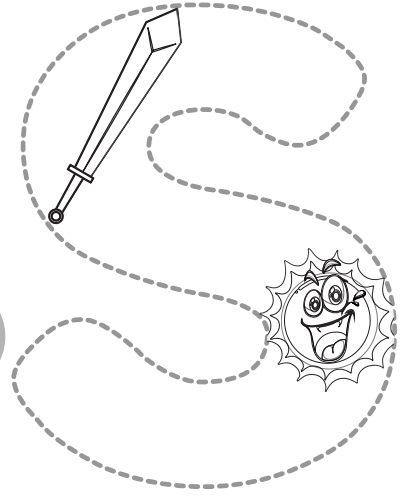
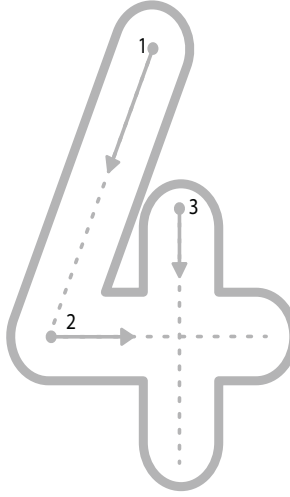
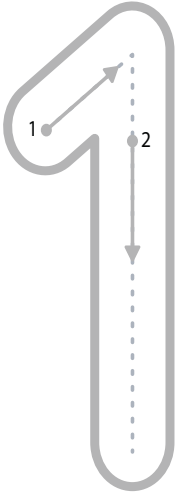
1

1

1

1





S

S S S S S S

s s s s s s s s s

SO SO SO SO SO SO

SOARE SOARE SOARE

14

14 14 14 14 14 14 14

PESTE 2 ANI



ALEX



ANA



MARA

CU  ANI

ARE CU  ANI

IN MINUS  
MAI MIC

IN PLUS  
MAI MARE

ACUM 2 ANI





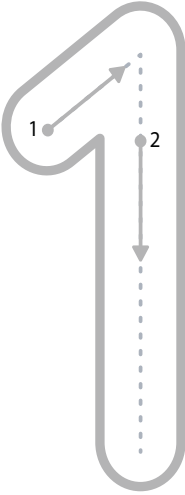
3

ZIUA

LUNA

ANUL

Lu Ma Mi J Vi



mărește cu   mărește cu


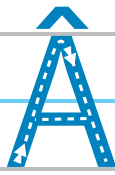
2 3

micșorează   micșorează

cu 2 cu 3

mărește cu   micșorează

2 cu 4



â

â

â

â

â

â

â

â

â

16

16

16

16

16

16

16

16

16

16

16

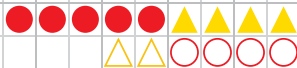
16

16

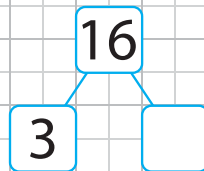
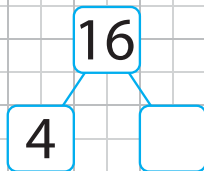
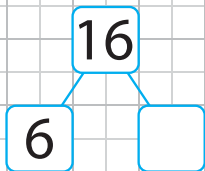
16


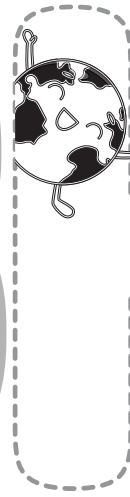
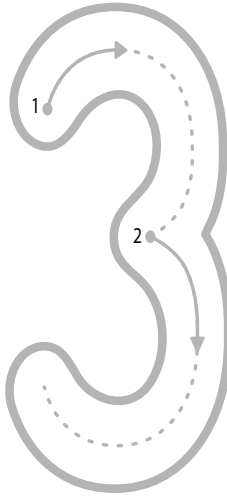
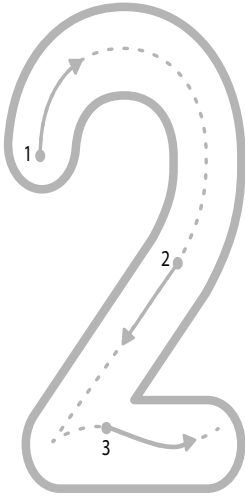
$$\begin{array}{r} 5 + \\ 16 - \end{array}$$

$$\begin{array}{r} 4 \\ 4 \end{array}$$



		-	4	=		
		+	4	=		





Completează șirul



Construiește cuvinte a căror sumă de corespondenți numerici se încadrează în centrul 1-23. Folosește tabelul cu litere.

A
1

C
5

 $\Rightarrow$ 

1
😊😊

 $+$ 

5
😊😊😊😊😊

 $=$ 

6
😊😊😊😊😊😊

 $\Rightarrow$ 

6
---

 $\Rightarrow$ 

▲▲▲▲▲
-------

 $\Rightarrow$ 

D
6

A
1

C
5

E
7

 $\Rightarrow$ 

😊😊	

 $+$ 

😊😊	

 $+$ 

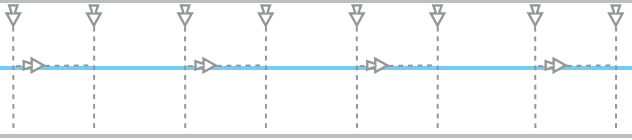
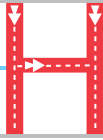
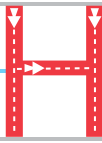
😊😊	

 $=$ 

😊😊	

Construiește șirul crescător și șirul descrescător al numerelor din pagină.





23

23

23

23

23

23

23

23

23

23

23


23

23

23

Ana și Mara au 23 de bomboane. Dacă Ana ar avea încă 6 bomboane, ar avea tot atâtea câte are Mara. Câte bomboane are fiecare fată?

Dacă Mara ar renunța la 6 bomboane, câte ar avea împreună?




$23 - 6 = \square \square$



Câte bomboane are Ana? 9



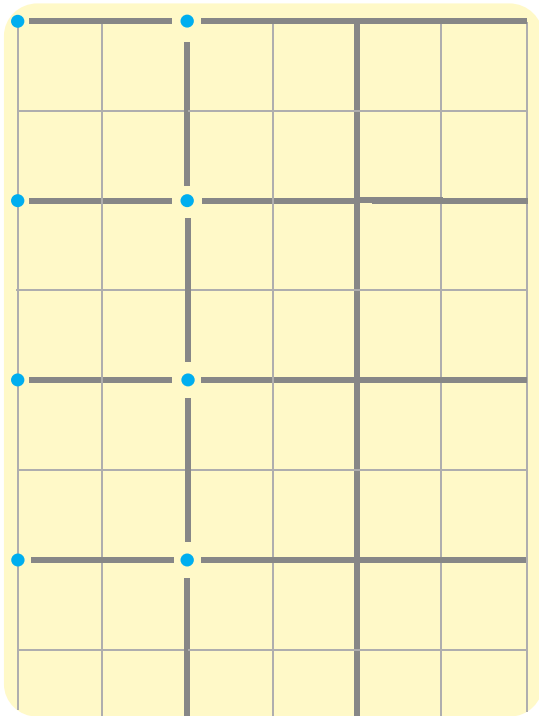


Câte bomboane are Mara?



$9 + 5 = \square \square$





5 948492 952795  
ISBN 978-606-95466-7-3

© Reproducerea parțială sau totală a materialelor NumLit este strict interzisă.  
Produs în România conform reglementărilor EN71  
CE +5 ani

